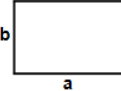
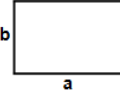


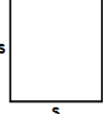


- 1)  Find area of rectangle having sides $a = 85$ m and $b = 51$ m


Answer: _____

- 2)  Find area of rectangle having sides $a = 73$ in and $b = 62$ in

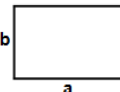
Answer: _____

- 3)  Find perimeter of square having each side (s) equals 97 ft

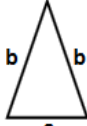
Answer: _____

- 4)  Find perimeter of square having each side (s) equals 38 ft


Answer: _____

- 5)  Find area of rectangle having sides $a = 34$ m and $b = 4$ m


Answer: _____

- 6)  Find perimeter of triangle $a = 31$ in , $b = 66$ in


Answer: _____

- 7)  Find perimeter of rectangle having sides $a = 100$ in and $b = 78$ in

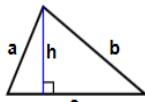
Answer: _____

- 8)  Find area of rectangle having sides $a = 96$ ft and $b = 82$ ft


Answer: _____

- 9)  Find perimeter of square having each side (s) equals 77 m

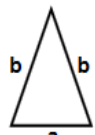
Answer: _____

- 10)  Find perimeter of triangle $h = 39$, $a = 72$ ft, $b = 88$ ft, $c = 91$ ft

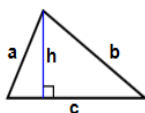
Answer: _____

- 11)  Find perimeter of square having each side (s) equals 98 ft


Answer: _____

- 12)  Find perimeter of triangle $a = 63$ ft , $b = 77$ ft


Answer: _____

- 13)  Find perimeter of triangle $h = 58$, $a = 72$ in, $b = 83$ in, $c = 95$ in

Answer: _____

- 14)  Find perimeter of rectangle having sides $a = 87$ m and $b = 68$ m

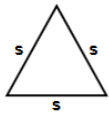
Answer: _____

- 15)  Find perimeter of square having each side (s) equals 72 cm

Answer: _____

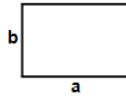


16)

Find area of
triangle $s = 72$ ft


Answer: _____

17)

Find perimeter of
rectangle having
sides $a = 47$ in
and $b = 34$ in

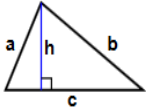
Answer: _____

18)

Find area of square
having each side (s)
equals 34 cm

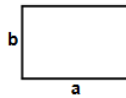
Answer: _____

19)

Find area of triangle
 $h = 21$ cm, $a = 31$
cm,
 $b = 81$ cm, $c = 87$
cm

Answer: _____

20)

Find area of
rectangle having
sides $a = 87$ in
and $b = 82$ in

Answer: _____

Total: ____ / 20

Name: _____

July 19, 2018

Sr: 19072018-490

MATHS WORKSHEET

GENERATOR

11-PLUS
SATS
GCSES



Answers:

- | | | | | | | |
|-----------|-----------------------|-----------|------------|-------------|------------|----------|
| 1) 4335m | 2) 4526in | 3) 388ft | 4) 152ft | 5) 136m | 6) 163in | 7) 356in |
| 8) 7872ft | 9) 308m | 10) 251ft | 11) 392ft | 12) 217ft | 13) 250in | 14) 310m |
| 15) 288cm | 16) 2244.7378466093ft | 17) 162in | 18) 1156cm | 19) 850.5cm | 20) 7134in | |